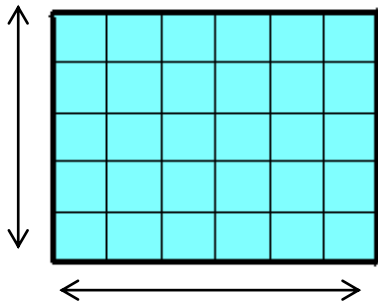
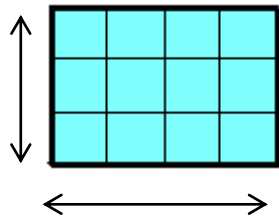


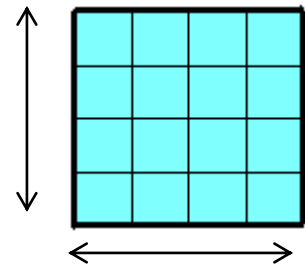
Entraînement 1 Calcule les aires des figures suivantes .



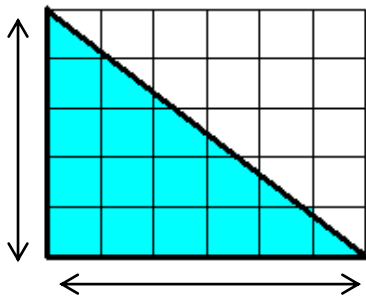
Aire = longueur x largeur
 = x
 =



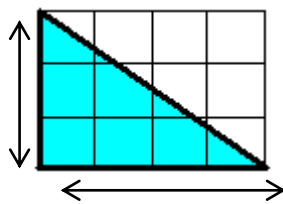
Aire = longueur x largeur
 = x
 =



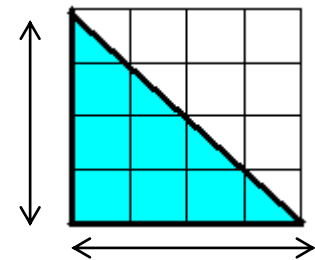
Aire = longueur x largeur
 = x
 =



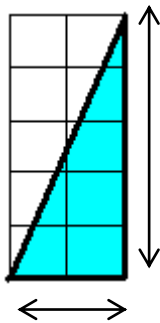
Aire = (longueur x largeur) : 2
 = (..... x) : 2
 = : 2
 =



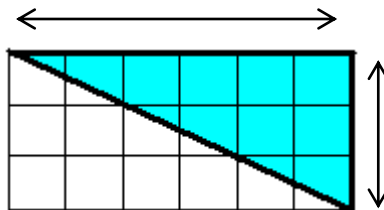
Aire = (longueur x largeur) : 2
 = (..... x) : 2
 = : 2
 =



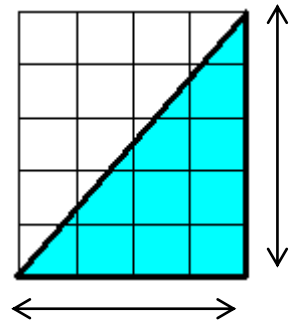
Aire = (longueur x largeur) : 2
 = (..... x) : 2
 = : 2
 =



Aire = (longueur x largeur) : 2
 = (..... x) : 2
 = : 2



Aire = (longueur x largeur) : 2
 = (..... x) : 2
 = :
 =



Aire = (longueur x largeur) : 2
 = (..... x) :
 = :

Entraînement 2 Mesure et calcule les aires des figures suivantes .

